




# FIFA World Cup 2026 Map Activity



# FIFA World Cup 2026 Map Activity



Label the three host nations of the 2026 World Cup:

- Canada 
- Mexico 
- USA 

Label the countries making their first-ever World Cup appearance:

- Curaçao 
- Jordan 
- Uzbekistan 

Label the Canadian host cities:

- Vancouver 
- Toronto 

Calculate the distance between the furthest host cities.



Label the different time zones across North America.














Label the Mexican host cities:

- Mexico City 
- Guadalajara 
- Monterrey 

Trace the route from the opening match in Mexico City (June 11) to the final in New York/New Jersey (July 19).



Label the USA host cities:

- Seattle 
- San Francisco 
- Los Angeles 
- Kansas City 
- Dallas 
- Houston 
- Atlanta 
- Miami 
- Philadelphia 
- New York New Jersey 
- Boston 

# FIFA World Cup 2026 Map Activity – Answers

